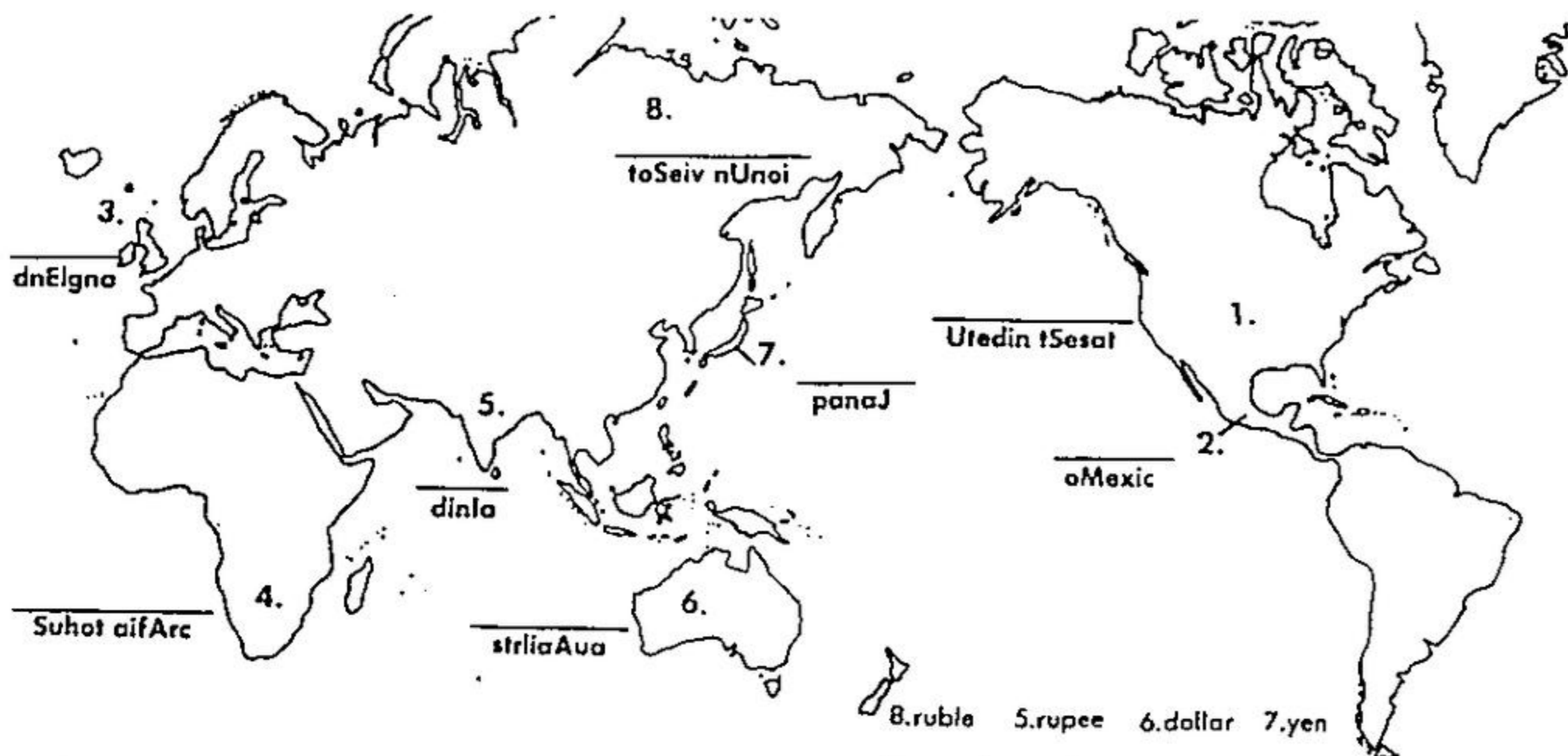


Young Outlook

Money Around The World

Unscramble the letters to name each country. Then look below and find the name of the money used in each country. Draw a line from the name of the money to the country it is used in. Hint: The numbers will help you.



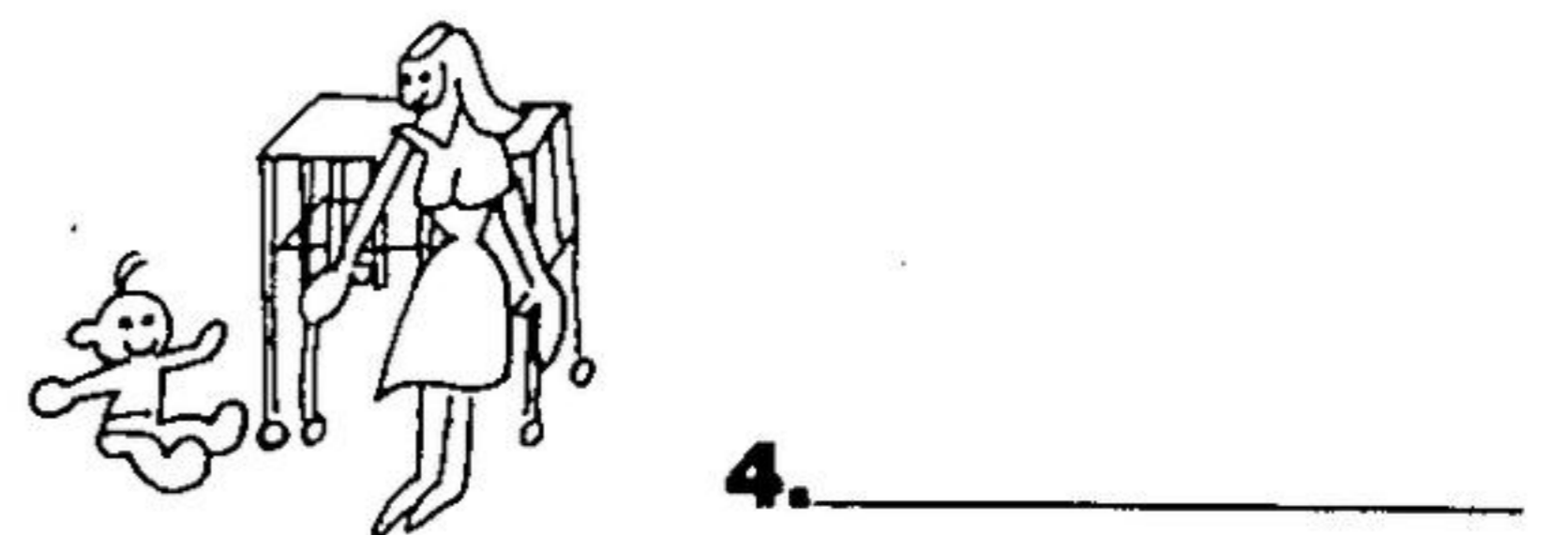
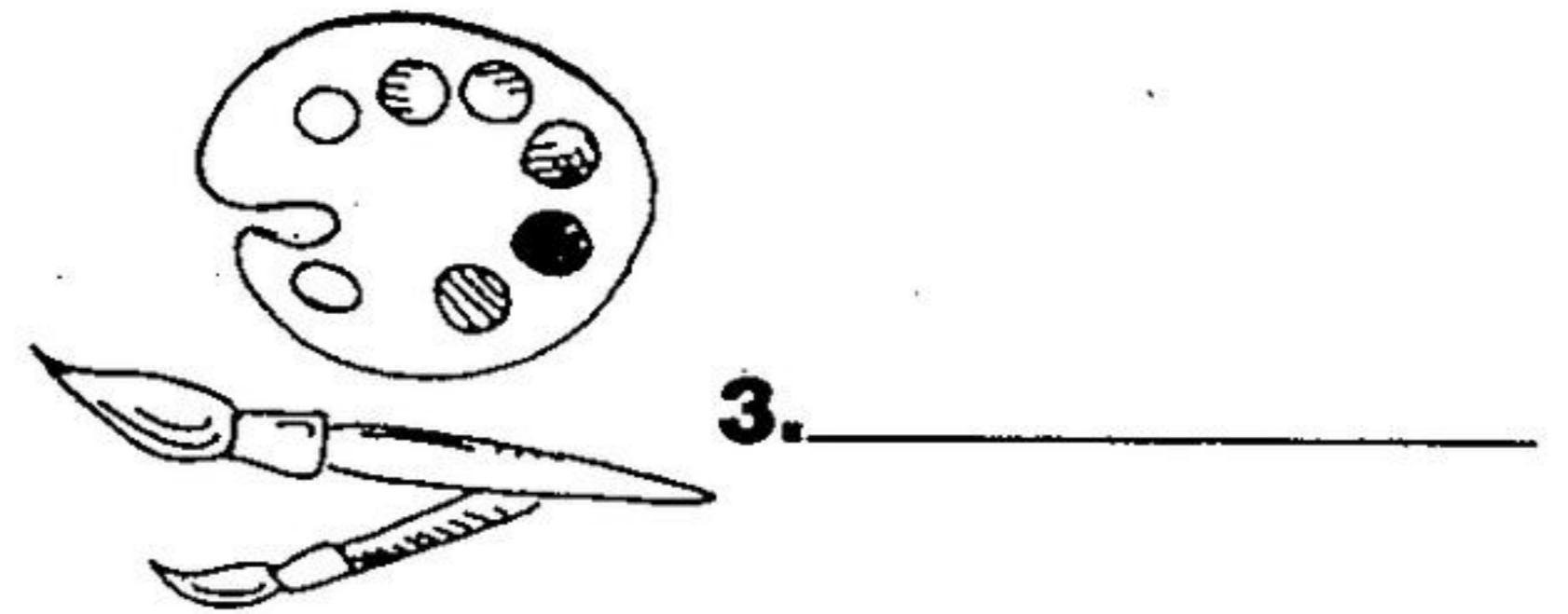
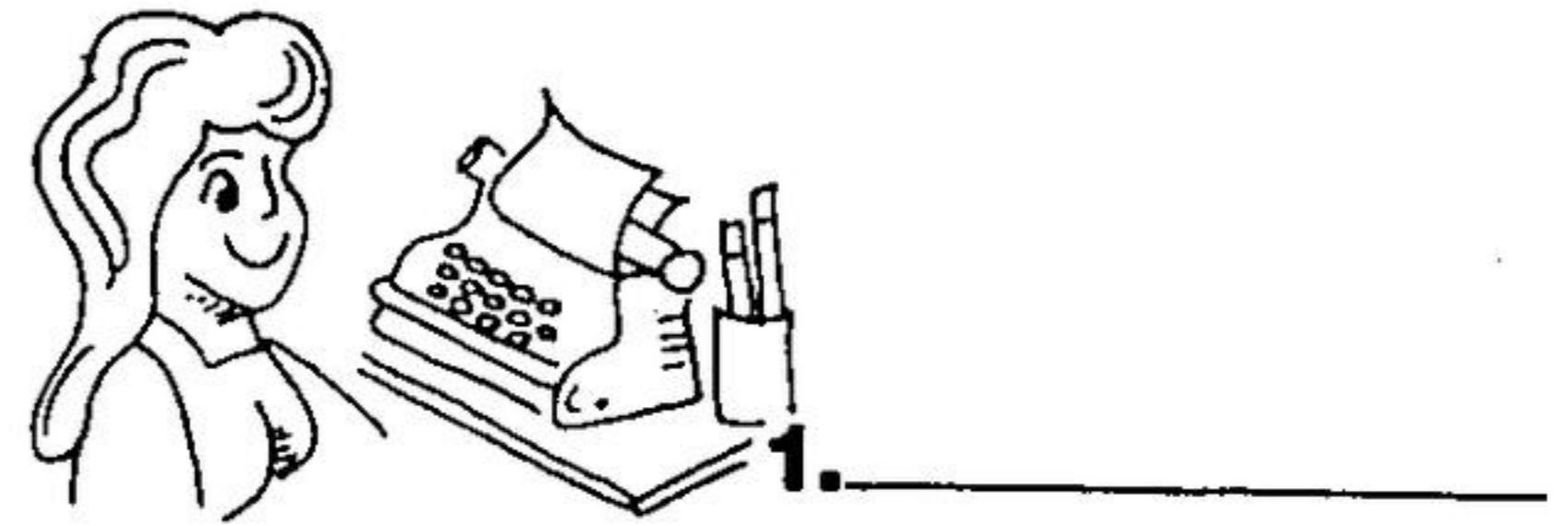
8. ruble 5. rupee 6. dollar 7. yen
3. pound 1. dollar 4. rand 2. peso

Answers: 1. United States, dollar 2. Mexico, peso 3. England, pound 4. South Africa, rand 5. India, rupee 6. Australia, dollar 7. Japan, yen 8. Soviet Union, ruble

Paid Professionals

In the United States there are two main kinds of businesses. One kind of business provides goods that people might need or want. This kind of business might be a toy store or a shoe store. Another kind of business provides service. This kind of business might be a baby-sitting service, or auto mechanic. A teacher also provides service.

People who have jobs are given money in exchange for the work they do. What jobs do each of the pictures below illustrate? Write the names of the professions on the blanks.



Answers: 1. secretary, 2. barber, 3. artist, 4. babysitter

BOYS — GIRLS

EARN A REGULAR INCOME — NO COLLECTIONS

The following routes will be coming available soon:

JESSOP CRT. — East end of Delrex will pay you \$8.30 per week.

ONTARIO, ANNE — Route 13 will earn you \$6.00 a week.

CREDIT, BEAVER, ERIN, ALEXANDER, PARK, CONFEDERATION — Will earn you \$46 per month towards your summer vacation.

MULLEN, KAREN — Will pay you \$6.00 per week.

FERNBROOK SUBDIVISION — is a route that can be built up.

WILSON, ROYDEN, ROSEFIELD — Will pay you \$22.80 per month.

BAYLOR, HALLS RD. — Will pay you \$7.20 per week.

ACTON:

CHURCHILL — Saving for that new bicycle? Earn \$26.00 a month with this route!

DANVILLE — Will earn you \$5 per week.

DON'T DELAY — CALL TODAY!


theHERALD 877-2201

Home Newspaper of Halton Hills • Established 1868



Alfie's Saving Plan

You should save your money for something you want or need. Alfie Alligator saved some money in his piggy bank. Count the money in Alfie's bank and write the amount on the blanks. Circle every item Alfie could buy.



Answers: Alfie has \$1.93. He can buy anything except the baseball glove (\$1.94) and the bat (\$1.96).



1. The field of economics studies how the things people need and want are made and brought to them. It also studies how people and nations choose the things they buy from among the many things

they want.
2. People today buy goods and services with money. A long time ago people exchanged things they grew or animal furs for the things they needed. This was called bartering.

HEY KIDS!

it's



and nothin' but

Fill out this page and bring it to:

PIZZA HUT
308 Guelph St. Georgetown

You will receive a
FREE KIDS MEAL

For Children 12 & Under Accompanied By An Adult - Dining Room Only
(Personal Pan Pepperoni Pizza, Soft Drink & Ice Cream) and your name will go in a draw for a:

FREE PIZZA PARTY
FOR YOUR FAMILY

(Large Pizza, Pitcher of Pop and Ice Cream for a Family of 4)

NAME _____

ADDRESS _____

PHONE NO. _____